



MACHAKOS UNIVERSITY

University Examinations for 2018/2019 Academic Year

SCHOOL OF AGRICULTURAL SCIENCES

DEPARTMENT OF AGRIBUSINESS MANAGEMENT AND TRADE

FIRST YEAR FIRST SEMESTER EXAMINATION FOR
MASTER OF SCIENCE IN AGRIBUSINESS MANAGEMENT

AGB 802: QUANTITATIVE METHODS IN AGRIBUSINESS

DATE: 21/6/2019

TIME: 10:00 – 1:00 PM

INSTRUCTIONS: Answer **QUESTION ONE** and **TWO other** questions. Clearly show all your workings. Statistical tables have been provided.

QUESTION ONE (COMPULSORY) (20 MARKS)

- a) Suppose the average number of trucks arriving at a warehouse in a 30-minute period of time is 8. What is the probability of exactly four arrivals in 30 minutes? (2 marks)
- b) A project activity has pessimistic, optimistic and most likely time estimates of 39, 27 and 32 days, respectively. Compute the activity's
- Mean duration (1 mark)
 - Standard deviation of the duration (1 mark)
- c) A company uses 5,200 packets of a certain fertilizer per annum, which costs Ksh.1,250 each to purchase. The ordering and handling costs are KSh 7,500 per order and carrying costs are 9% of purchase price per annum. Compute the economic order quantity. (3 marks)
- d) A sample of 23 packets of rice returned a mean of 24.9Kg and standard deviation of 2.9Kg. What is the 99 percent confidence interval for the population mean? (3 marks)

e) Using the data below:

- i) find the correlation coefficient (3 marks)
- ii) comment on the relationship between the two variables (1 mark)

Business age (years)	21	23	24	25	26	27
Profit (KSh Million)	1387	1754	1817	1040	1273	1529

f) The following data shows sales revenue from 150 companies. Find the

- i) Mean revenue (3 marks)
- ii) Median revenue (3 marks)

Revenue (Ksh)	200-600	600-1,000	1,000-1,400	1,400-1,800	1,800-2,200	2,200-2,600
Frequency (f)	8	16	28	33	40	25

QUESTION TWO (20 MARKS)

- a) A customer claims that eggs from two of your poultry farms are not of the same size. As the production manager you sample 23 eggs from one farm and 17 eggs from the second farm and obtain mean weights of 56.3gm and 53.1gm respectively. The sample standard deviation of farm1 eggs is 2.3gm while that of farm2 eggs is 2.9gm. Show whether you find the consumer's claim statistically justified (8 marks)
- b) A farmer must decide on the enterprise to invest in, to maximize returns in her 30 acres farm. The farmer can produce maize, kales, sorghum or tomatoes. Crop output is dependent on weather. When rains are average, the farmer can produce 0.7, 1.2, 1.5 and 0.9 tons per acre of maize, kales, sorghum and tomatoes, respectively. Yields under high rainfall are 1.9, 1.6, 1.7 and 2.8 tons per acre, respectively, while under poor rains, the yields are 0.3, 0.5, 1.2 and 0.5 tons per acre, respectively. The table below shows rainfall probabilities and associated grain prices. Advise the farmer based on:
 - i) Any two methods applying the ignorance approach. (4 marks)
 - ii) The expected value approach (8 marks)

Enterprise	High Rainfall (probability = 0.3)	Low Rainfall (probability=0.2)	Medium Rainfall Probability = 0.5)
	Price (Ksh/kg)	Price (Ksh/kg)	Price (KSh/kg)
Maize	21	35	25
Kales	15	45	30
Sorghum	35	60	45
Tomatoes	50	120	75

QUESTION THREE (20 MARKS)

a) The data below was extracted from records of Maziwa Ltd.

- i) Develop a linear regression equation for estimating output (10 marks)
- ii) Predict milk output if the firm spends KSh 48,000 on supplements (2 marks)

Supplementscosts (Ksh '000)	6	11	17	27	32
Milk output ('000 litres)	5	13	20	23	27

b) A cereal trader intends to distribute wheat from her four warehouses to four towns at the lowest possible cost. Quantities available at the warehouses are 50, 40, 75 and 40 tons respectively, while wheat demand is 60, 45, 30, and 70 tons in the four towns, respectively. It will cost the trader KSh 5500, 4000, 1000 and 2500 to ship a ton of wheat from the first warehouse to towns 1,2,3 and 4; KSh 3000, 5000, 4500 and 2,000 to ship a ton of wheat from the second warehouse to towns 1,2,3 and 4; KSh 4000, 4700, 1500 and 2,000 to ship a ton of wheat from the third warehouse to towns 1,2,3 and 4, respectively, and KSh 3500, 1250, 6500 and 1,800 to ship a ton of wheat from the fourth warehouse to towns 1,2,3 and 4, respectively.

Advise the trader on the best transport routes using:

- i) The Intuitive Lowest-Cost Method (4 marks)
- ii) The North West Corner Rule (4 marks)

QUESTION FOUR (20 MARKS)

- a) Below is data showing profits earned by agrodealer shops in three counties in 2018. Test for the difference in profits across the counties. (10 marks)

Profit (KSh)			
County A	County B	County C	County D
10	34	6	35
14	30	42	32
20	76	26	17
12	50	19	5

- b) The following table gives data for normal and crashed time and cost of project activities.
- Draw the project network using the activity-on-arrow approach (3 marks)
 - Determine a crashing scheme for the project so that the total project time is reduced by 12 weeks (4 marks)
 - What is the overall project duration after crashing? (1 mark)
 - What is the optimal project cost after crashing? (2 marks)

Activity	Predecessor Activity	Time (wks)		Cost (KSh)	
		Normal	Crash	Normal	Crash
A		4	3	8000	9000
B	A	5	3	16000	20000
C	A	4	3	12000	13000
D	B	6	5	34000	35000
E	C,D	6	4	42000	44000
F	B,E	5	4	16000	16500

QUESTION FIVE (20 MARKS)

- a) The following table shows the number of farmers adopting irrigation in a certain Village.
Test whether adoption differs among men, women and the youth (8 marks)

Adoption	Women	Men	Youth
Number of farmers adopting irrigation	9	16	2
Number of farmers not adopting irrigation	27	25	17

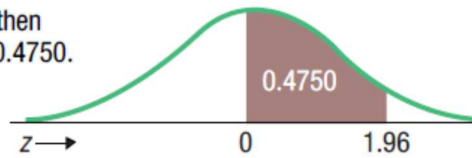
- b) Suppose a firm is producing two types of products P1 and P2 and has approached you for advice. The profits per Kg of the two products are KSh 60 and Ksh 80 respectively. These two products require three types of inputs: land, labor and capital, as shown in the table below.

- i) Formulate the problem in the form of linear programming model (3 marks)
ii) Using the simplex method, advise the firm (6 marks)
iii) Comment on resource usage (3 marks)

Profit/Kg	P1 (KSh 60)	P1 (KSh 80)	Total available
Land (acres)	3	2	600
Labor (man days)	30	50	800
Capital (KSh '000)	5	6	1100

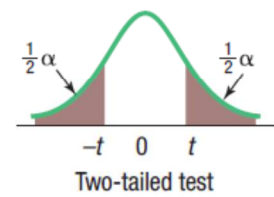
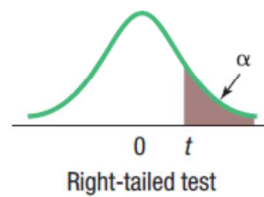
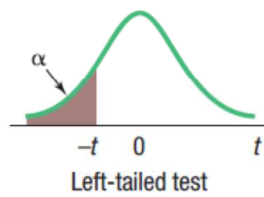
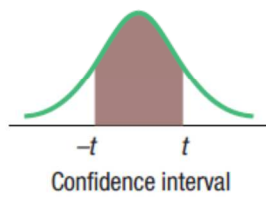
B.1 Areas under the Normal Curve

Example:
If $z = 1.96$, then
 $P(0 \text{ to } z) = 0.4750$.



z	0.00	0.01	0.02	0.03	0.04	0.05	0.06	0.07	0.08	0.09
0.0	0.0000	0.0040	0.0080	0.0120	0.0160	0.0199	0.0239	0.0279	0.0319	0.0359
0.1	0.0398	0.0438	0.0478	0.0517	0.0557	0.0596	0.0636	0.0675	0.0714	0.0753
0.2	0.0793	0.0832	0.0871	0.0910	0.0948	0.0987	0.1026	0.1064	0.1103	0.1141
0.3	0.1179	0.1217	0.1255	0.1293	0.1331	0.1368	0.1406	0.1443	0.1480	0.1517
0.4	0.1554	0.1591	0.1628	0.1664	0.1700	0.1736	0.1772	0.1808	0.1844	0.1879
0.5	0.1915	0.1950	0.1985	0.2019	0.2054	0.2088	0.2123	0.2157	0.2190	0.2224
0.6	0.2257	0.2291	0.2324	0.2357	0.2389	0.2422	0.2454	0.2486	0.2517	0.2549
0.7	0.2580	0.2611	0.2642	0.2673	0.2704	0.2734	0.2764	0.2794	0.2823	0.2852
0.8	0.2881	0.2910	0.2939	0.2967	0.2995	0.3023	0.3051	0.3078	0.3106	0.3133
0.9	0.3159	0.3186	0.3212	0.3238	0.3264	0.3289	0.3315	0.3340	0.3365	0.3389
1.0	0.3413	0.3438	0.3461	0.3485	0.3508	0.3531	0.3554	0.3577	0.3599	0.3621
1.1	0.3643	0.3665	0.3686	0.3708	0.3729	0.3749	0.3770	0.3790	0.3810	0.3830
1.2	0.3849	0.3869	0.3888	0.3907	0.3925	0.3944	0.3962	0.3980	0.3997	0.4015
1.3	0.4032	0.4049	0.4066	0.4082	0.4099	0.4115	0.4131	0.4147	0.4162	0.4177
1.4	0.4192	0.4207	0.4222	0.4236	0.4251	0.4265	0.4279	0.4292	0.4306	0.4319
1.5	0.4332	0.4345	0.4357	0.4370	0.4382	0.4394	0.4406	0.4418	0.4429	0.4441
1.6	0.4452	0.4463	0.4474	0.4484	0.4495	0.4505	0.4515	0.4525	0.4535	0.4545
1.7	0.4554	0.4564	0.4573	0.4582	0.4591	0.4599	0.4608	0.4616	0.4625	0.4633
1.8	0.4641	0.4649	0.4656	0.4664	0.4671	0.4678	0.4686	0.4693	0.4699	0.4706
1.9	0.4713	0.4719	0.4726	0.4732	0.4738	0.4744	0.4750	0.4756	0.4761	0.4767
2.0	0.4772	0.4778	0.4783	0.4788	0.4793	0.4798	0.4803	0.4808	0.4812	0.4817
2.1	0.4821	0.4826	0.4830	0.4834	0.4838	0.4842	0.4846	0.4850	0.4854	0.4857
2.2	0.4861	0.4864	0.4868	0.4871	0.4875	0.4878	0.4881	0.4884	0.4887	0.4890
2.3	0.4893	0.4896	0.4898	0.4901	0.4904	0.4906	0.4909	0.4911	0.4913	0.4916
2.4	0.4918	0.4920	0.4922	0.4925	0.4927	0.4929	0.4931	0.4932	0.4934	0.4936
2.5	0.4938	0.4940	0.4941	0.4943	0.4945	0.4946	0.4948	0.4949	0.4951	0.4952
2.6	0.4953	0.4955	0.4956	0.4957	0.4959	0.4960	0.4961	0.4962	0.4963	0.4964
2.7	0.4965	0.4966	0.4967	0.4968	0.4969	0.4970	0.4971	0.4972	0.4973	0.4974
2.8	0.4974	0.4975	0.4976	0.4977	0.4977	0.4978	0.4979	0.4979	0.4980	0.4981
2.9	0.4981	0.4982	0.4982	0.4983	0.4984	0.4984	0.4985	0.4985	0.4986	0.4986
3.0	0.4987	0.4987	0.4987	0.4988	0.4988	0.4989	0.4989	0.4989	0.4990	0.4990

B.2 Student's *t* Distribution

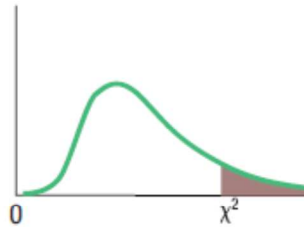


Confidence Intervals, <i>c</i>						
<i>df</i>	80%	90%	95%	98%	99%	99.9%
	Level of Significance for One-Tailed Test, α					
	0.10	0.05	0.025	0.01	0.005	0.0005
	Level of Significance for Two-Tailed Test, α					
	0.20	0.10	0.05	0.02	0.01	0.001
1	3.078	6.314	12.706	31.821	63.657	636.619
2	1.886	2.920	4.303	6.965	9.925	31.599
3	1.638	2.353	3.182	4.541	5.841	12.924
4	1.533	2.132	2.776	3.747	4.604	8.610
5	1.476	2.015	2.571	3.365	4.032	6.869
6	1.440	1.943	2.447	3.143	3.707	5.959
7	1.415	1.895	2.365	2.998	3.499	5.408
8	1.397	1.860	2.306	2.896	3.355	5.041
9	1.383	1.833	2.262	2.821	3.250	4.781
10	1.372	1.812	2.228	2.764	3.169	4.587
11	1.363	1.796	2.201	2.718	3.106	4.437
12	1.356	1.782	2.179	2.681	3.055	4.318
13	1.350	1.771	2.160	2.650	3.012	4.221
14	1.345	1.761	2.145	2.624	2.977	4.140
15	1.341	1.753	2.131	2.602	2.947	4.073
16	1.337	1.746	2.120	2.583	2.921	4.015
17	1.333	1.740	2.110	2.567	2.898	3.965
18	1.330	1.734	2.101	2.552	2.878	3.922
19	1.328	1.729	2.093	2.539	2.861	3.883
20	1.325	1.725	2.086	2.528	2.845	3.850
21	1.323	1.721	2.080	2.518	2.831	3.819
22	1.321	1.717	2.074	2.508	2.819	3.792
23	1.319	1.714	2.069	2.500	2.807	3.768
24	1.318	1.711	2.064	2.492	2.797	3.745
25	1.316	1.708	2.060	2.485	2.787	3.725
26	1.315	1.706	2.056	2.479	2.779	3.707
27	1.314	1.703	2.052	2.473	2.771	3.690
28	1.313	1.701	2.048	2.467	2.763	3.674
29	1.311	1.699	2.045	2.462	2.756	3.659
30	1.310	1.697	2.042	2.457	2.750	3.646
31	1.309	1.696	2.040	2.453	2.744	3.633
32	1.309	1.694	2.037	2.449	2.738	3.622
33	1.308	1.692	2.035	2.445	2.733	3.611
34	1.307	1.691	2.032	2.441	2.728	3.601
35	1.306	1.690	2.030	2.438	2.724	3.591

Confidence Intervals, <i>c</i>						
<i>df</i>	80%	90%	95%	98%	99%	99.9%
	Level of Significance for One-Tailed Test, α					
	0.10	0.05	0.025	0.01	0.005	0.0005
	Level of Significance for Two-Tailed Test, α					
	0.20	0.10	0.05	0.02	0.01	0.001
36	1.306	1.688	2.028	2.434	2.719	3.582
37	1.305	1.687	2.026	2.431	2.715	3.574
38	1.304	1.686	2.024	2.429	2.712	3.566
39	1.304	1.685	2.023	2.426	2.708	3.558
40	1.303	1.684	2.021	2.423	2.704	3.551
41	1.303	1.683	2.020	2.421	2.701	3.544
42	1.302	1.682	2.018	2.418	2.698	3.538
43	1.302	1.681	2.017	2.416	2.695	3.532
44	1.301	1.680	2.015	2.414	2.692	3.526
45	1.301	1.679	2.014	2.412	2.690	3.520
46	1.300	1.679	2.013	2.410	2.687	3.515
47	1.300	1.678	2.012	2.408	2.685	3.510
48	1.299	1.677	2.011	2.407	2.682	3.505
49	1.299	1.677	2.010	2.405	2.680	3.500
50	1.299	1.676	2.009	2.403	2.678	3.496
51	1.298	1.675	2.008	2.402	2.676	3.492
52	1.298	1.675	2.007	2.400	2.674	3.488
53	1.298	1.674	2.006	2.399	2.672	3.484
54	1.297	1.674	2.005	2.397	2.670	3.480
55	1.297	1.673	2.004	2.396	2.668	3.476
56	1.297	1.673	2.003	2.395	2.667	3.473
57	1.297	1.672	2.002	2.394	2.665	3.470
58	1.296	1.672	2.002	2.392	2.663	3.466
59	1.296	1.671	2.001	2.391	2.662	3.463
60	1.296	1.671	2.000	2.390	2.660	3.460
61	1.296	1.670	2.000	2.389	2.659	3.457
62	1.295	1.670	1.999	2.388	2.657	3.454
63	1.295	1.669	1.998	2.387	2.656	3.452
64	1.295	1.669	1.998	2.386	2.655	3.449
65	1.295	1.669	1.997	2.385	2.654	3.447
66	1.295	1.668	1.997	2.384	2.652	3.444
67	1.294	1.668	1.996	2.383	2.651	3.442
68	1.294	1.668	1.995	2.382	2.650	3.439
69	1.294	1.667	1.995	2.382	2.649	3.437
70	1.294	1.667	1.994	2.381	2.648	3.435

B.3 Critical Values of Chi-Square

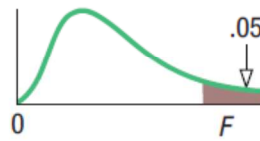
This table contains the values of χ^2 that correspond to a specific right-tail area and specific number of degrees of freedom.



Example: With 17 *df* and a .02 area in the upper tail, $\chi^2 = 30.995$

Degrees of Freedom, <i>df</i>	Right-Tail Area			
	0.10	0.05	0.02	0.01
1	2.706	3.841	5.412	6.635
2	4.605	5.991	7.824	9.210
3	6.251	7.815	9.837	11.345
4	7.779	9.488	11.668	13.277
5	9.236	11.070	13.388	15.086
6	10.645	12.592	15.033	16.812
7	12.017	14.067	16.622	18.475
8	13.362	15.507	18.168	20.090
9	14.684	16.919	19.679	21.666
10	15.987	18.307	21.161	23.209
11	17.275	19.675	22.618	24.725
12	18.549	21.026	24.054	26.217
13	19.812	22.362	25.472	27.688
14	21.064	23.685	26.873	29.141
15	22.307	24.996	28.259	30.578
16	23.542	26.296	29.633	32.000
17	24.769	27.587	30.995	33.409
18	25.989	28.869	32.346	34.805
19	27.204	30.144	33.687	36.191
20	28.412	31.410	35.020	37.566
21	29.615	32.671	36.343	38.932
22	30.813	33.924	37.659	40.289
23	32.007	35.172	38.968	41.638
24	33.196	36.415	40.270	42.980
25	34.382	37.652	41.566	44.314
26	35.563	38.885	42.856	45.642
27	36.741	40.113	44.140	46.963
28	37.916	41.337	45.419	48.278
29	39.087	42.557	46.693	49.588
30	40.256	43.773	47.962	50.892

B.4 Critical Values of the *F* Distribution at a 5 Percent Level of Significance



	Degrees of Freedom for the Numerator															
	1	2	3	4	5	6	7	8	9	10	12	15	20	24	30	40
1	161	200	216	225	230	234	237	239	241	242	244	246	248	249	250	251
2	18.5	19.0	19.2	19.2	19.3	19.3	19.4	19.4	19.4	19.4	19.4	19.4	19.4	19.5	19.5	19.5
3	10.1	9.55	9.28	9.12	9.01	8.94	8.89	8.85	8.81	8.79	8.74	8.70	8.66	8.64	8.62	8.59
4	7.71	6.94	6.59	6.39	6.26	6.16	6.09	6.04	6.00	5.96	5.91	5.86	5.80	5.77	5.75	5.72
5	6.61	5.79	5.41	5.19	5.05	4.95	4.88	4.82	4.77	4.74	4.68	4.62	4.56	4.53	4.50	4.46
6	5.99	5.14	4.76	4.53	4.39	4.28	4.21	4.15	4.10	4.06	4.00	3.94	3.87	3.84	3.81	3.77
7	5.59	4.74	4.35	4.12	3.97	3.87	3.79	3.73	3.68	3.64	3.57	3.51	3.44	3.41	3.38	3.34
8	5.32	4.46	4.07	3.84	3.69	3.58	3.50	3.44	3.39	3.35	3.28	3.22	3.15	3.12	3.08	3.04
9	5.12	4.26	3.86	3.63	3.48	3.37	3.29	3.23	3.18	3.14	3.07	3.01	2.94	2.90	2.86	2.83
10	4.96	4.10	3.71	3.48	3.33	3.22	3.14	3.07	3.02	2.98	2.91	2.85	2.77	2.74	2.70	2.66
11	4.84	3.98	3.59	3.36	3.20	3.09	3.01	2.95	2.90	2.85	2.79	2.72	2.65	2.61	2.57	2.53
12	4.75	3.89	3.49	3.26	3.11	3.00	2.91	2.85	2.80	2.75	2.69	2.62	2.54	2.51	2.47	2.43
13	4.67	3.81	3.41	3.18	3.03	2.92	2.83	2.77	2.71	2.67	2.60	2.53	2.46	2.42	2.38	2.34
14	4.60	3.74	3.34	3.11	2.96	2.85	2.76	2.70	2.65	2.60	2.53	2.46	2.39	2.35	2.31	2.27
15	4.54	3.68	3.29	3.06	2.90	2.79	2.71	2.64	2.59	2.54	2.48	2.40	2.33	2.29	2.25	2.20
16	4.49	3.63	3.24	3.01	2.85	2.74	2.66	2.59	2.54	2.49	2.42	2.35	2.28	2.24	2.19	2.15
17	4.45	3.59	3.20	2.96	2.81	2.70	2.61	2.55	2.49	2.45	2.38	2.31	2.23	2.19	2.15	2.10
18	4.41	3.55	3.16	2.93	2.77	2.66	2.58	2.51	2.46	2.41	2.34	2.27	2.19	2.15	2.11	2.06
19	4.38	3.52	3.13	2.90	2.74	2.63	2.54	2.48	2.42	2.38	2.31	2.23	2.16	2.11	2.07	2.03
20	4.35	3.49	3.10	2.87	2.71	2.60	2.51	2.45	2.39	2.35	2.28	2.20	2.12	2.08	2.04	1.99
21	4.32	3.47	3.07	2.84	2.68	2.57	2.49	2.42	2.37	2.32	2.25	2.18	2.10	2.05	2.01	1.96
22	4.30	3.44	3.05	2.82	2.66	2.55	2.46	2.40	2.34	2.30	2.23	2.15	2.07	2.03	1.98	1.94
23	4.28	3.42	3.03	2.80	2.64	2.53	2.44	2.37	2.32	2.27	2.20	2.13	2.05	2.01	1.96	1.91
24	4.26	3.40	3.01	2.78	2.62	2.51	2.42	2.36	2.30	2.25	2.18	2.11	2.03	1.98	1.94	1.89
25	4.24	3.39	2.99	2.76	2.60	2.49	2.40	2.34	2.28	2.24	2.16	2.09	2.01	1.96	1.92	1.87
30	4.17	3.32	2.92	2.69	2.53	2.42	2.33	2.27	2.21	2.16	2.09	2.01	1.93	1.89	1.84	1.79
40	4.08	3.23	2.84	2.61	2.45	2.34	2.25	2.18	2.12	2.08	2.00	1.92	1.84	1.79	1.74	1.69
60	4.00	3.15	2.76	2.53	2.37	2.25	2.17	2.10	2.04	1.99	1.92	1.84	1.75	1.70	1.65	1.59
120	3.92	3.07	2.68	2.45	2.29	2.18	2.09	2.02	1.96	1.91	1.83	1.75	1.66	1.61	1.55	1.50
∞	3.84	3.00	2.60	2.37	2.21	2.10	2.01	1.94	1.88	1.83	1.75	1.67	1.57	1.52	1.46	1.39